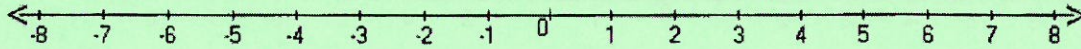


Student Name: _____

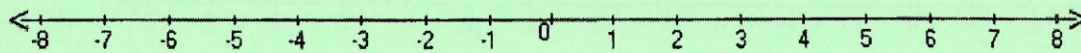
Score: _____

Graph the Inequalities

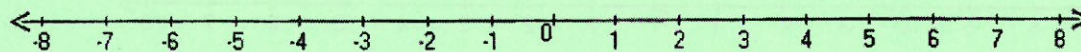
$$a \geq -1$$



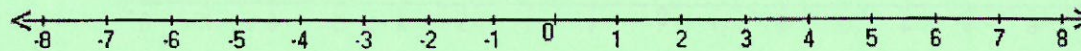
$$n < -6$$




$$5 \leq k$$



$$-6 \geq -r$$



$$h < 7$$




Student Name: _____

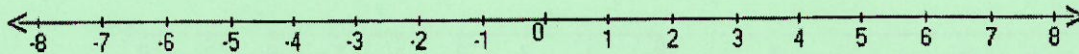
Score: _____

Graph the Inequalities

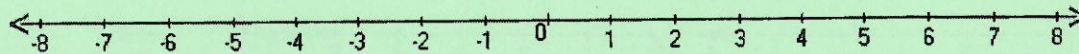
$$y > 4$$



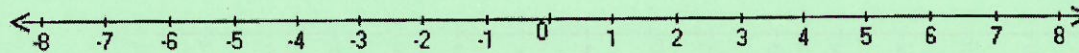
$$m \leq -3$$



$$p < 0$$



$$k \geq -5$$



$$z \leq 1$$

